

Geometric planter project: Lesson 1 Pretest

1. What is 3 D printing?

I don't know

X

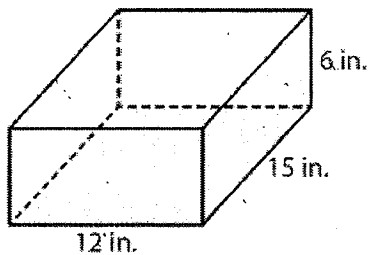
2. What you think the 3D printing is use in today's society?

Many people use

✓

3. What is the total surface area of the below figures?

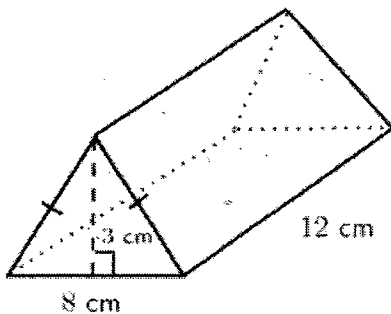
a.



$$6 \times 15 = 90$$

X

b.



$$8 \times 3 \times 12 = 288$$

X

Geometric planter project: Lesson 1 Pretest

1. What is 3 D printing?

idk

x

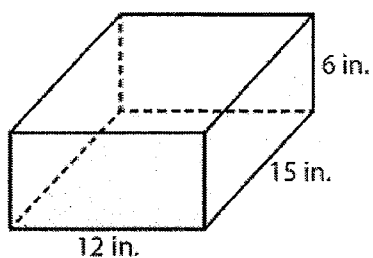
2. What you think the 3D printing is use in today's society?

idk

x

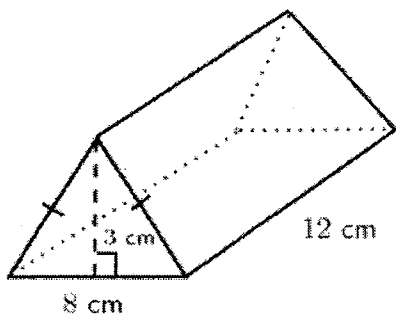
3. What is the total surface area of the below figures?

a.



$$12 \times 6 = 72 \quad x$$

b.



$$8 \times 12 = 96 \quad x$$